

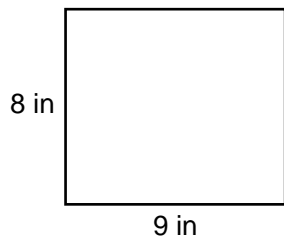
# Calculating Area & Perimeter

Name: \_\_\_\_\_ Date: \_\_\_\_\_



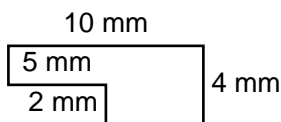
Calculate the area and perimeter of each shape.

(1)



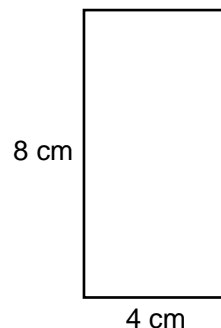
Perimeter: \_\_\_\_\_  
Area: \_\_\_\_\_

(2)



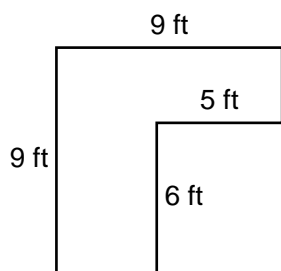
Perimeter: \_\_\_\_\_  
Area: \_\_\_\_\_

(3)



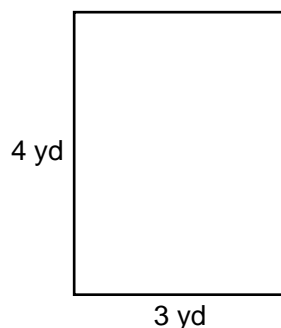
Perimeter: \_\_\_\_\_  
Area: \_\_\_\_\_

(4)



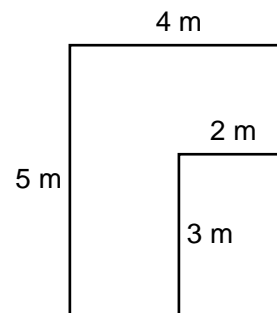
Perimeter: \_\_\_\_\_  
Area: \_\_\_\_\_

(5)



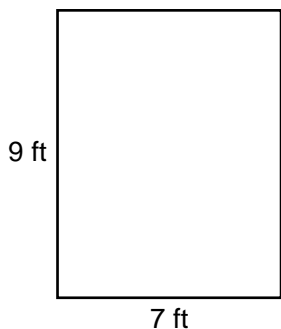
Perimeter: \_\_\_\_\_  
Area: \_\_\_\_\_

(6)



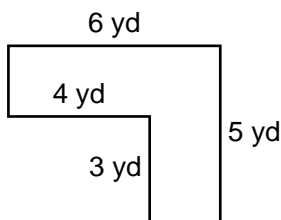
Perimeter: \_\_\_\_\_  
Area: \_\_\_\_\_

(7)



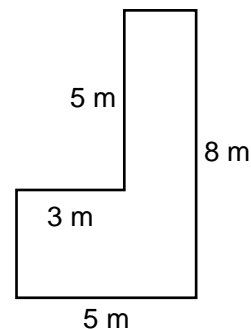
Perimeter: \_\_\_\_\_  
Area: \_\_\_\_\_

(8)



Perimeter: \_\_\_\_\_  
Area: \_\_\_\_\_

(9)



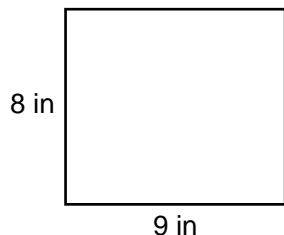
Perimeter: \_\_\_\_\_  
Area: \_\_\_\_\_

# Calculating Area & Perimeter ANSWER KEY



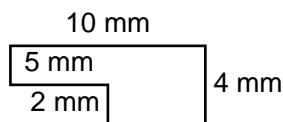
Calculate the area and perimeter of each shape.

(1)



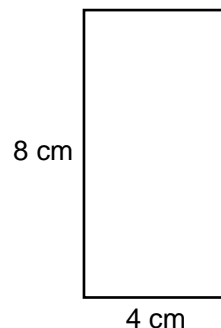
Perimeter:  $\underline{34 \text{ in}}$   
Area:  $\underline{72 \text{ in}^2}$

(2)



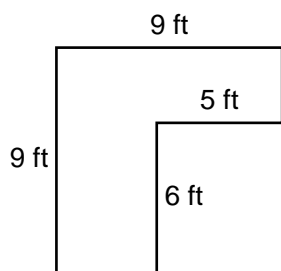
Perimeter:  $\underline{28 \text{ mm}}$   
Area:  $\underline{30 \text{ mm}^2}$

(3)



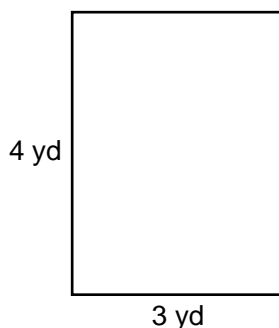
Perimeter:  $\underline{24 \text{ cm}}$   
Area:  $\underline{32 \text{ cm}^2}$

(4)



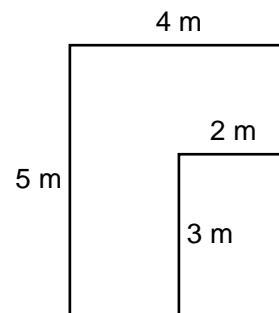
Perimeter:  $\underline{36 \text{ ft}}$   
Area:  $\underline{51 \text{ ft}^2}$

(5)



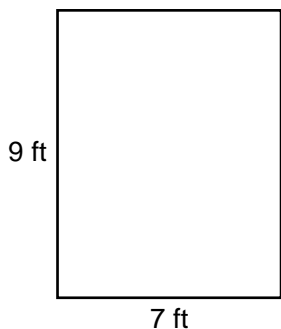
Perimeter:  $\underline{14 \text{ yd}}$   
Area:  $\underline{12 \text{ yd}^2}$

(6)



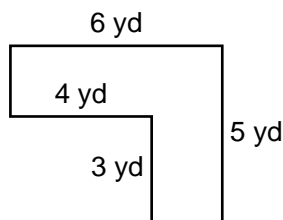
Perimeter:  $\underline{18 \text{ m}}$   
Area:  $\underline{14 \text{ m}^2}$

(7)



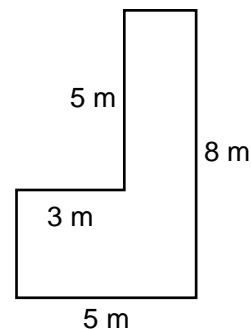
Perimeter:  $\underline{32 \text{ ft}}$   
Area:  $\underline{63 \text{ ft}^2}$

(8)



Perimeter:  $\underline{22 \text{ yd}}$   
Area:  $\underline{18 \text{ yd}^2}$

(9)



Perimeter:  $\underline{26 \text{ m}}$   
Area:  $\underline{25 \text{ m}^2}$